



Year 6 Home Learning

miStAkEs
are proof
that you are
TRYING

Week 2

I would like to say a big well done to all the children that have completed the work set so far, you're making me a very proud teacher! We have got this year 6!

<u>Monday</u>	<ul style="list-style-type: none">○ Practise Spellings (research and write down the meanings)○ Reading comprehension: Buster Book - Set B Test 2○ Grammar Dictionary
<u>Tuesday</u>	<ul style="list-style-type: none">○ Practise Spellings (put into a sentence)○ White Rose maths challenge - Angles in a triangle
<u>Wednesday</u>	<ul style="list-style-type: none">○ SPAG Buster Book - Set B Test 4○ Hogwarts Ghost Story
<u>Thursday</u>	<ul style="list-style-type: none">○ Practise Spellings (word search)○ Make a 100th birthday card for Captain Tom.
<u>Friday</u>	<ul style="list-style-type: none">○ Spelling Test○ Maths Buster Book - Set B Test 5○ Sketch and label the human heart.

Study like Granger - Protect like Weasley - Live like Potter



Week 2 Spellings -

Sincerely

Neighbour

Lightning

Thorough

Guarantee

Shoulder

Achieve

Muscle

Soldier

Curiosity

Nuisance

Controversy

Bruise

Apparent

Twelfth

Queue

Ways to practise -

Find meanings

Put into a sentence: CHALLENGE - can you add an adjective to your sentence?

Word search

Friday Spelling Test - ask a member of your family to test you.

YEAR 5-6 WORD-SEARCH USING WORD LIST FROM
NATIONAL CURRICULUM 2014

WORD-SEARCH 2

Q	M	B	R	A	S	A	D	T	F	G	H	J
N	U	I	S	A	N	C	E	H	R	Y	C	A
A	S	E	R	T	E	H	Q	O	S	A	U	S
G	C	B	U	S	G	I	R	R	J	S	R	D
D	L	B	I	E	J	E	E	O	K	L	I	N
H	E	U	D	F	D	V	W	U	I	L	O	E
J	R	S	Z	L	O	E	M	G	C	B	S	I
B	X	C	U	R	N	K	H	H	V	R	I	G
I	E	O	T	R	L	T	W	E	L	F	T	H
K	H	N	S	I	N	C	E	R	E	L	Y	B
S	O	L	D	I	E	R	A	S	D	F	R	O
C	Y	T	N	E	R	A	P	P	A	G	E	U
W	U	G	U	A	R	A	N	T	E	E	B	R

Can you find the following words in the grid?

queue

apparent

controversy

curiosity

muscle

shoulder

thorough

neighbour

twelfth

bruise

nuisance

soldier

achieve

guarantee

lightning

sincerely

Name:

Class:

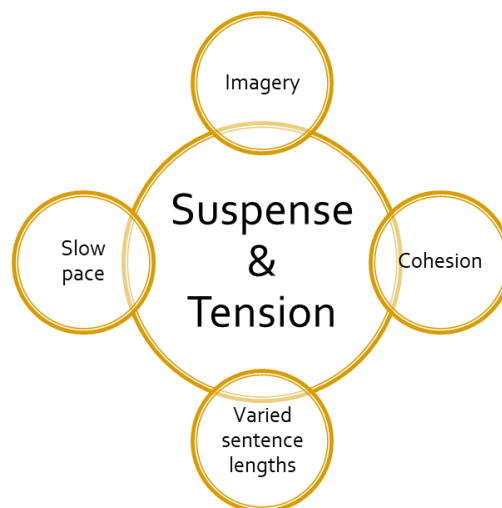
Activities explained -

Hogwarts Ghost Story -

Hogwarts is full of ghosts. Your task is to write a ghost story based in Hogwarts. It could be about one of the ghosts below or you could create your own:

- Moaning Myrtle
- Nearly Headless Nick

Plan your story so that it builds in suspense and tension and ends on a cliff hanger.



Choose a ghost and decide whether you want to explain how the person became a ghost and haunted Hogwarts or describe a day in the "life" of that ghost.

Choose a suitable location:

- The Great Hall
- The Dungeons
- The Library
- The Forbidden Forest

Example

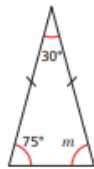
The attic door creaked open. Something rustled in the darkness. I stared, but could see nothing beyond the vague shapes of old suitcases and trunks piled high. It smelt damp. I struggled up into the attic and wedged the door open. Light poured into darkness. The darkness in the head of the house. I balanced carefully upon the floor beams. I knew that if I stepped onto plaster I could fall straight through into the room below. A cobweb brushed my face and I felt the sudden tickle of a spider crawl across my cheek. As I made my way forwards, it grew darker and colder. I was blocking the light from the attic door. There were piles of old newspapers, brown bags tied with string cardboard boxes and ancient, moth eaten rugs that smelt of mothballs. Thick dust powdered every surface. I kept thinking that I could slip and put my foot through the floor. I stopped at a pile of old camping equipment. It was a jumble of guy ropes, torn canvas, poles, wooden pegs, metal skewers and a mallet. It was there that I saw the hand. It was quite still and white, like a marble. But then it moved.

White Rose Maths CHALLENGE - Angles in a triangle

Angles in a triangle – special cases



1 Here is a triangle.



a) What type of triangle is it?

How do you know?


b) Work out the size of angle m .

c) What do you notice?

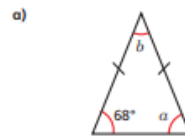
d) Complete the sentence to describe the angles in an isosceles triangle.

In an isosceles triangle _____

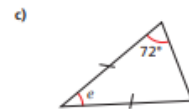
2 Identify and label the angles that will be equal in each triangle.



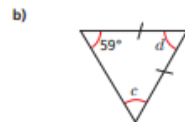
3 Work out the sizes of the unknown angles.



$a =$ $b =$



$e =$



$c =$ $d =$



$f =$

Talk about your reasons with a partner.

4 Dexter is working out the unknown angles in triangles.



I can't work out either of the missing angles because I don't have enough information.



Do you agree with Dexter? _____

Explain your answer.

Please show your working out in your yellow home learning book!

Captain Tom Moore Raises Over 25 Million!

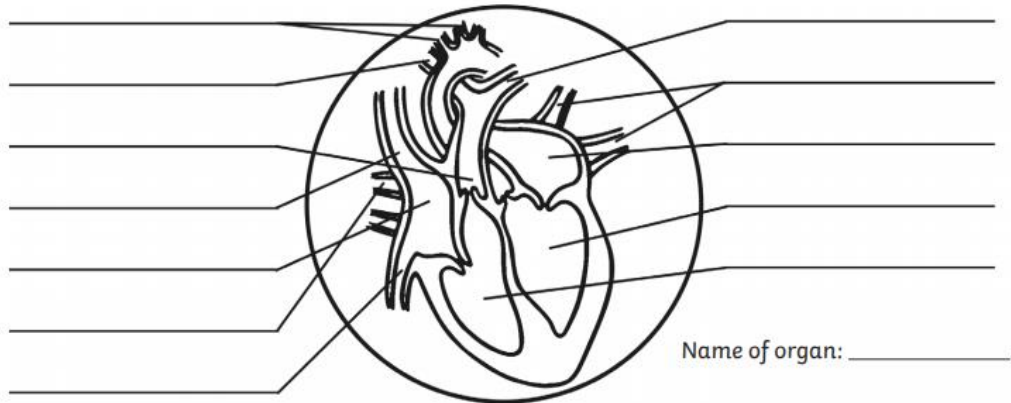
CAPTAIN Tom Moore aimed to raise £1,000 for NHS charities, but at the time of writing, he'd hit over £25 million, and the number was still rising - WOW

Captain Tom's birthday is coming up, and he'll be turning 100 years old! Let's make him a birthday card to show our appreciation for his kind efforts. Make it as bright and colourful as you can! Once you have finished, take a picture and ask a trusted adult share it on social media with the hashtag #MakeacardforTom.



Science -

1. Sketch the human heart.
2. Label the cardiovascular system.



Other Activities -

1. Daily Joe Wicks Workouts (Miss Whitby & Lola have completed this everyday)
2. Times table Rockstar
3. Pobble 365
4. BBC Bitesize